



ANNUAL EXAMINATION (2025-26)
CLASS – IV
MATHS



Time Allowed: 2 Hours


Maximum Marks : 50

General Instructions:

1. This Question Paper contains 5 pages and 24 questions. It has 5 Sections A, B, C, D, E.
2. Section A consists of 10 questions of 1 mark each, Section B consists of 6 questions of 2 marks each, Section C consists of 4 questions of 3 marks each, Section D consists of 2 questions of 4 marks each and Section E consists of 2 questions of 4 marks each.
3. All questions are compulsory.
4. Use of calculators and correction fluid is strictly prohibited.
5. 15 minutes time has been allotted for reading the question paper. No answer should be written in the answer booklet or question paper during this time.

SECTION A: MCQ		1×10
1.	A book shop kept 9 books in each pile . If there are 14 such piles , then the number of books the shop have is a) 124 b) 125 c) 126 d) 127	1
2	1 L = ? mL a) 100 mL b) 1000 mL c) 10 mL d) 10000 mL	1
3.	The double of 11 is a) 22 b) 20 c) 11 d) 44	1
4.	Manku the monkey sees 870 bananas in the market. If each bunch has 10 bananas then the number of bunches in the market is a) 70 b) 80 c) 87 d) 90	1
5.	A school bus hires 7 buses to take 245 children to the transport museum. If each bus carries the same number of children then the number of children travelling in each bus is	1

	a) 33 b) 35 c) 43 d) 45	
6.	4000 ÷ 2000 = ? a) 2000 b) 40 c) 20 d) 2	1
7.	Observe the pattern and choose what's next? 354 , 1354, 2354, 3354 , _____. a) 5555 b) 44444 c) 3311 d) 4354	1
8.	Assam has 5719 elephants . If it has 3965 more elephants than Meghalaya then the number of elephants in Meghalaya is a) 1745 b) 1574 c) 1754. d) 1177	1
9.	If yesterday was Saturday then tomorrow will be a) Monday. b) Tuesday. c) Wednesday. d) Thursday	1
10.	44 hundreds = _____ ? a) 440. b) 4400. c) 44000. d) 404	1
	SECTION B	2×6
11.	Radha is packing cupcakes in boxes of 4. She has packed 18 boxes. How many cupcakes are there in the packed boxes? (Show your calculations) _____ cupcakes in 1 box. _____ × _____ cupcakes in 18 boxes. _____ cupcakes in 18 boxes.	2
12.	Fill in the blanks: a) 1 hr.= _____ min. b) Half an hour= _____ min. c) Quarter of an hour= _____ min. d) Three quarters of an hour= _____ min.	2
13.	Write the time :- (include seconds also) <div style="display: flex; justify-content: space-around; align-items: center;"> <div style="text-align: center;">  <p>a)</p> </div> <div style="text-align: center;">  <p>b)</p> </div> </div> <p>(Note: Don't draw the clocks in copy . Just write the timings shown in the clocks).</p>	2

	<table border="1"> <tbody> <tr> <td>103 cars</td> <td>4560</td> </tr> <tr> <td>20 minibus</td> <td>156</td> </tr> <tr> <td>30 aeroplane</td> <td>964</td> </tr> <tr> <td>15 Train sleeper coaches</td> <td>412</td> </tr> </tbody> </table>	103 cars	4560	20 minibus	156	30 aeroplane	964	15 Train sleeper coaches	412	
103 cars	4560									
20 minibus	156									
30 aeroplane	964									
15 Train sleeper coaches	412									
19.	Convert 12 hr clock timing to 24 hr clock timing: a) 12:50 am. b) 4:40 pm. c) 3:39 am	3								
20.	Draw a clock and show the time 1559 hrs.	3								
	SECTION D	2×4								
21.	 <p>Check the manufacturing and expiry date on this wrapper and answer the questions below:</p> <p>a) How old is this packet? b) From today how many more days is this toffee safe to eat?</p>	4								

22.

Deposit Slip

SPB

Date

Account no. _____ Name: Rani

Amount (in numbers): _____

Total Amount (in words): _____

Type of Note/ coin	No. of Notes/ coins	Amount
500		
100		
50		
10		
5		
2		
1		
Total		

Depositor's Signature: _____

4

Deposit Slip

SPB

Date

Account no. _____ Name: Roja

Amount (in numbers): _____

Total Amount (in words): _____

Type of Note/ coin	No. of Notes/ coins	Amount
500		
100		
50		
10		
5		
2		
1		
Total		

Depositor's Signature: _____

If Rani has ₹3578 and Roja has ₹1240 then help them to fill the deposit slips given above.

SECTION E

2×4

23.

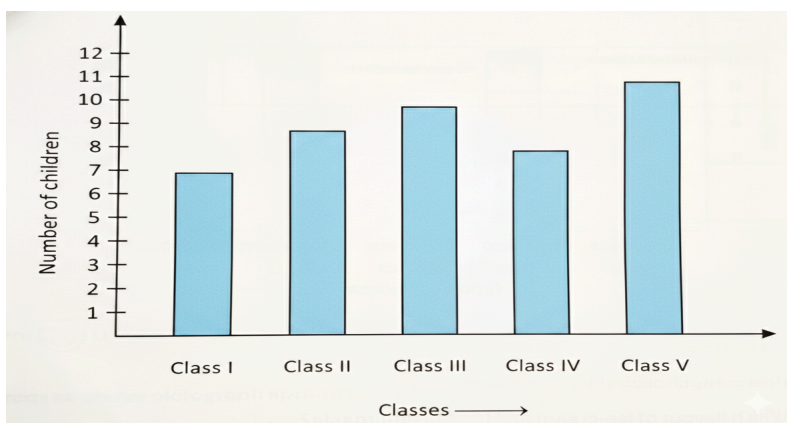
In a juice making factory, women make different types of juices as given below:

- The number of bottles of guava juice is 759 more than the number of bottles of pineapple juice . Find the number of bottles of guava juice. (1)
- The number of bottles of orange juice is 1417 less than the number of bottles of passion fruit juice. How many bottles of orange juice are made in a month? (1)
- Is the total number of bottles of guava juice and orange juice more or less than the number of bottles of passion fruit juice? How much more or less? (2)

4

Type of juice	Number of bottles packed in a month
Pineapple	1348
Guava
Orange
Passion fruit	4781

24.



4

- From which class did 10 children take part?
- From which class did the maximum number of children take part?
- How many children took part in class I ?
- How many more children took part in class II than class I ?
